



Tang Math Summer Fun!

Summertime!					
Play Coin Bubble	Play BreakApart Make 10 (easy level)	Play NumTanga Level 1, 2, & 3	Play How Much How Many	Complete Tangy Tuesday Puzzle Pack	
Play Expresso 3 Number (+ -)		Play Missing (-) Combo (easy level)		Play Ten Frame Mania	
	Read & Play Math Appeal	Play Math Limbo (Learn Mode)		Play Kakooma + (Play or Compete 6)	



Go to level 4!



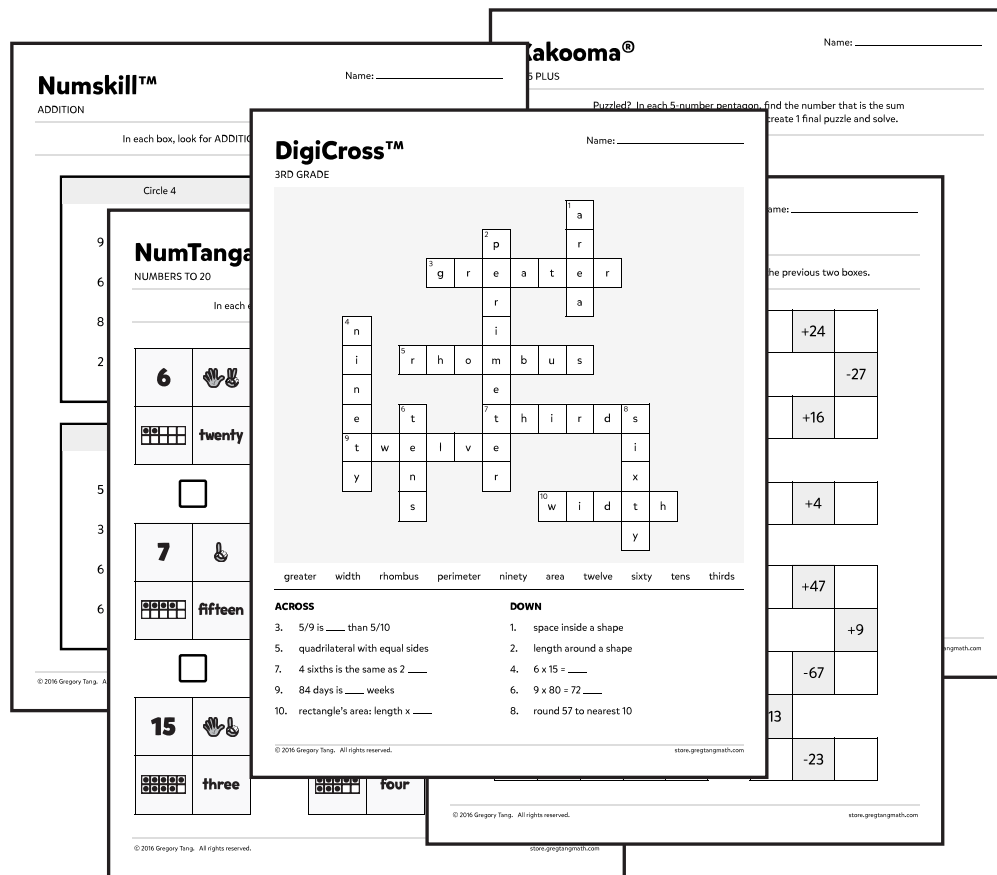
Level 3 Game Board

TangMath.com

- Find games and activities at TangMath.com
- Play each game for 15 minutes
- Try to complete each level with no errors
- Play the harder levels if activities are too easy
- Move to the previous game board if you get stuck
- Get help from an adult or family member

TANGY TUESDAY PUZZLE PACK

Fun brain puzzles that make you smarter!




Math Centers
Teaching Activities
Homework
Early Finishers
Fun Reward Games

Created by

GREG TANG MATH

store.gregtangmath.com



greater ninety-nine four fifteen twenty eight quarter hundreds fifty meter

ACROSS

2. 2 quarters = ____ ¢
4. one of 4 equal parts
8. $50 + 30 + 19$
9. 1 ____ is longer than 1 centimeter
10. 459 is ____ than 338

DOWN

1. $14 - 6$
3. $819 = 8 \text{ ____} + 1 \text{ ten} + 9 \text{ ones}$
5. $627 = 600 + \text{ ____} + 7$
6. 3 rows of 5 cans are ____ cans
7. ____ + 8 = 12

Snake

2.1.10

Name: _____

Licensed to:


store.gregtangmath.com © 2016 Gregory Tang


Fill in each blank box in order, combining the numbers from the previous two boxes.


19	-3		-5		-7		+16	
								-19
	+13		+3		-8		+9	
-6								
	-4		-1		-1		+11	17


4			+13				-3	
+9		-16		-9		+8		+10
-6		+8		+1		-9		+2
	+2				+6			20


In each empty box, write the matching value between adjacent cards.


28	10+9
	fifteen


12	10+4
	nineteen


16	10+7
	twenty eight


29	10+3
	seventeen

17	10+1
	twenty four

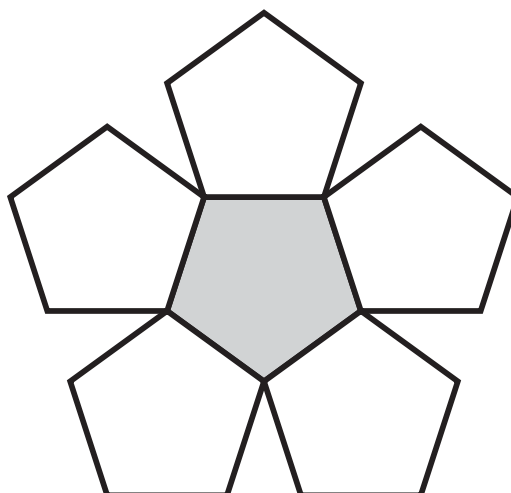
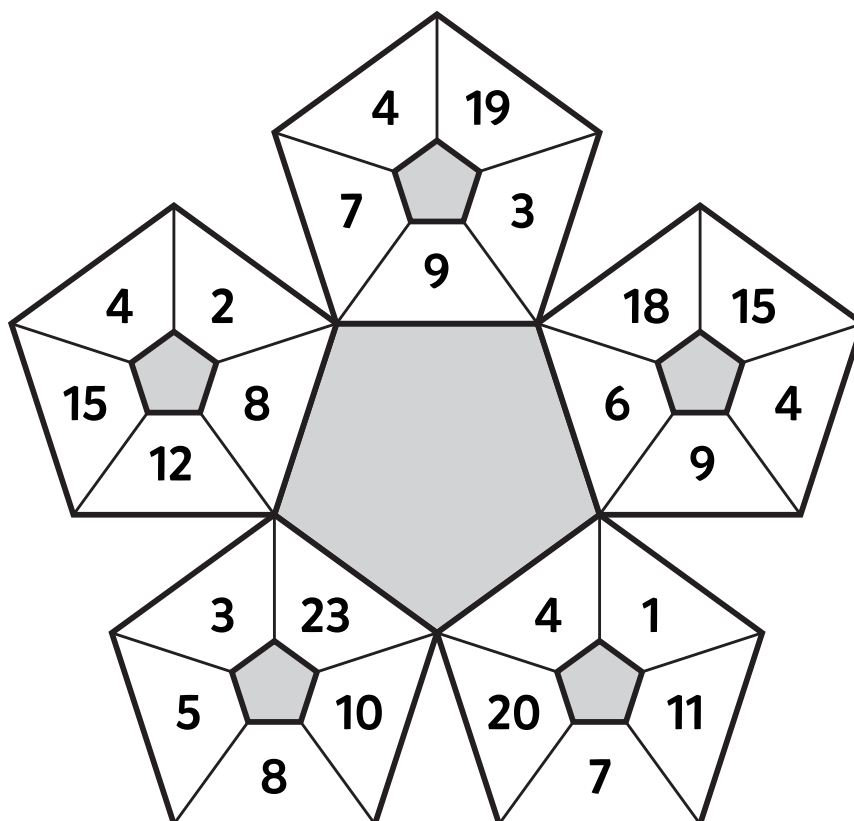
18	20+9
	eleven

13	20+8
	fourteen

21	20+4
	twenty nine

19	20+1
	eighteen

Puzzled? In each 5-number pentagon, find the number that is the sum of 2 other numbers. Use all 5 sums to create 1 final puzzle and solve.



Final
answer:



Fill in the empty boxes to make every horizontal and vertical equation correct. Use the correct order of operations and read left to right and top to bottom. Use every number in the number bank once.

NUMBER BANK

1 2 3 3 4 4 5 5

4	=		-	2	+	
+		-		=		=
	+	3	=		+	1
=		+		-		+
	+		=	1	+	5
+		=		-		-
	+		=	2	+	5